



INDIAN SCHOOL AL WADI AL KABIR

DEPARTMENT OF MATHEMATICS (2021-2022)

TOPIC: TIME

WORKSHEET

RESOURCE PERSON: Ms. SOUMYA L S NAIR

NAME: _____ CLASS: IV SEC: _____ DATE: _____

I. Choose the correct option and mark as a.m. or p.m.

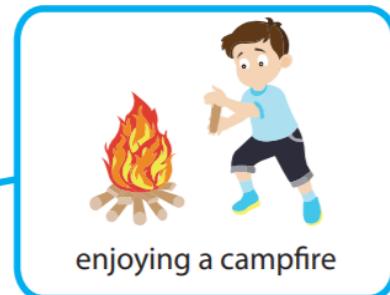
1)



waking up

A.M. P.M.


2)



enjoying a campfire

A.M. P.M.

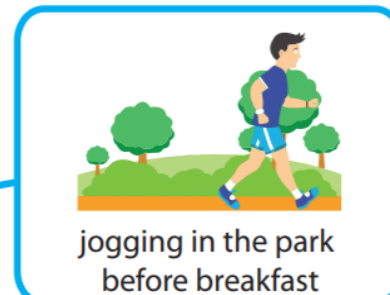
3)



watching a movie
after dinner

A.M. P.M.

4)



jogging in the park
before breakfast

A.M. P.M.

5)



morning recess at school

A.M. P.M.

6)



taking ballet lessons
after school

A.M. P.M.

II. Write time in 24- hour clock format.

1. 11:23 a.m. = _____
2. 5:05 p.m. = _____
3. 1:45 p.m. = _____
4. 9:10 p.m. = _____
5. 2:30 a.m. = _____

III. Write time in 12- hour clock format.

1. 22:15 = _____
2. 06:46 = _____
3. 15:07 = _____
4. 20:50 = _____
5. 04:35 = _____

IV. The table shows the Monday morning schedule for Mrs. Sampson's class.

Morning School Day Schedule		
Subject or Activity	Start Time	End Time
Morning Greeting	8:30 a.m.	8:45 a.m.
Reading	8:45 a.m.	9:30 a.m.
Art	9:30 a.m.	10:30 a.m.
Math	10:30 a.m.	11:15 a.m.
Lunch and Recess	11:15 a.m.	12:00 p.m.

Which subject or activity is one hour long?

- a. Morning Greeting
- b. Reading
- c. Art
- d. Math
- e. Lunch and Recess

V. Look at the clock. What time will it be in 60 minutes?



- a. 2:00
- a. 2:45
- b. 3:00
- c. 3:15

VI. The current time is shown. What time was it 2 hours ago?



- a. 2:27
- b. 5:10
- c. 12:27
- d. 2:30

VII. The clock shows what time the children arrived at the mall. If they shopped for 4 hours, what time was it when they finished shopping?



- a. 5:10
- b. 8:10
- c. 6:10
- d. 6:30